


Identify Time Signatures


Name _____

Date _____


Circle the correct meter signature:

1 


4 6 3 4 2 9 5
8 8 4 4 4 8 4

2 

4 6 3 4 2 9 5
8 8 4 4 4 8 4

3 


4 6 3 4 2 9 5
8 8 4 4 4 8 4

4 


4 6 3 4 2 9 5
8 8 4 4 4 8 4

5 


4 6 3 4 2 9 5
8 8 4 4 4 8 4

6 

4 6 3 4 2 9 5
8 8 4 4 4 8 4

7 

4 6 3 4 2 9 5
8 8 4 4 4 8 4

8 


4 6 3 4 2 9 5
8 8 4 4 4 8 4

Identify Time Signatures - 2


Name _____

Date _____


Determine the correct meter signature:

1 


4 6 3 4 2 9 5
8 8 4 4 4 8 4

2 


4 6 3 4 2 9 5
8 8 4 4 4 8 4

3 


4 6 3 4 2 9 5
8 8 4 4 4 8 4

4 


4 6 3 4 2 9 5
8 8 4 4 4 8 4

5 

4 6 3 4 2 9 5
8 8 4 4 4 8 4

6 

4 6 3 4 2 9 5
8 8 4 4 4 8 4

7 

4 6 3 4 2 9 5
8 8 4 4 4 8 4

8 

4 6 3 4 2 9 5
8 8 4 4 4 8 4